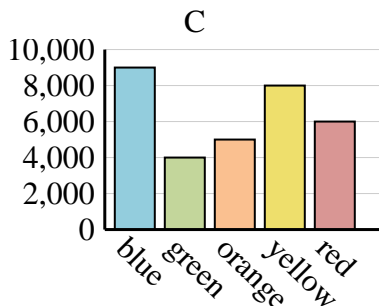
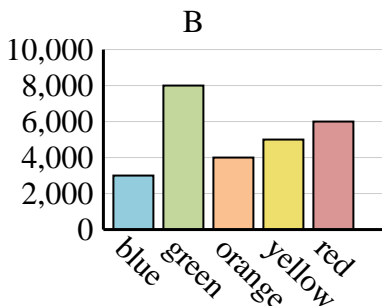
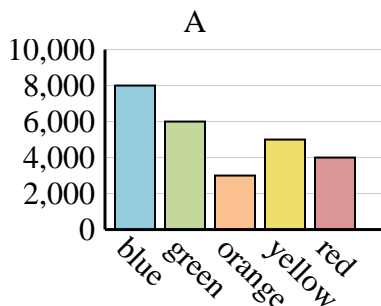




Determine which graph (A, B or C) best represents the information in the table.

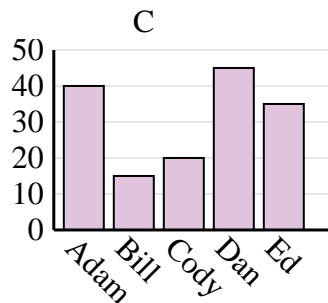
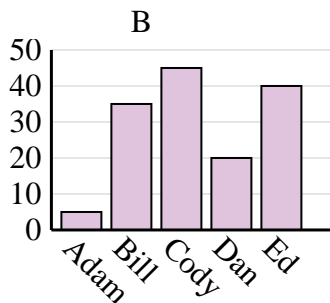
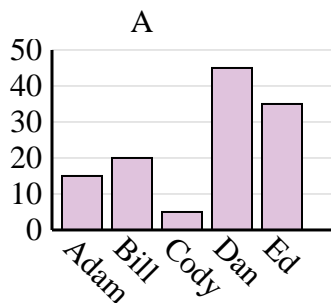
Answers

Favorite Color	blue	green	orange	yellow	red
People	9,000	4,000	5,000	8,000	6,000

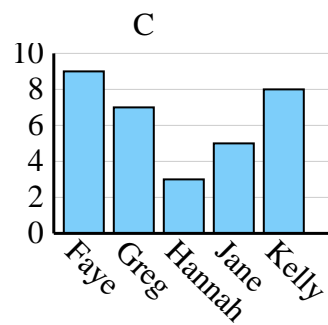
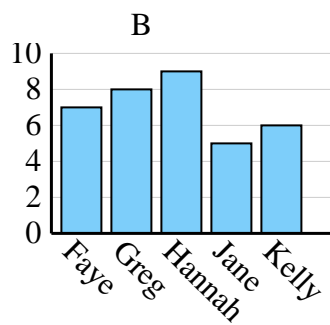
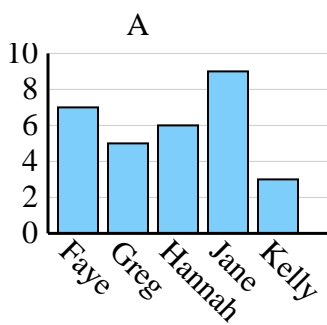


1. _____
2. _____
3. _____
4. _____

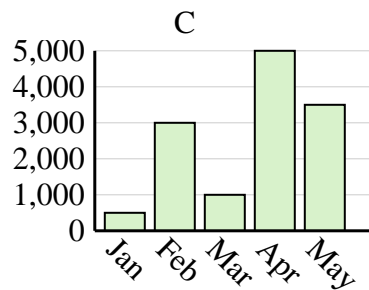
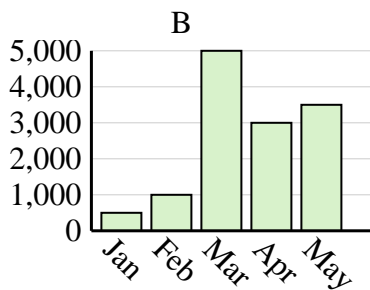
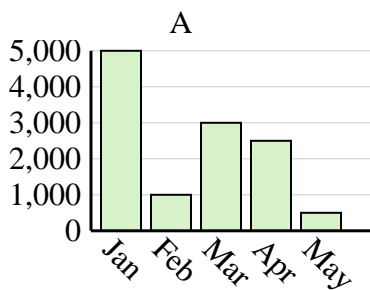
Name	Adam	Bill	Cody	Dan	Ed
Points	5	35	45	20	40



Name	Faye	Greg	Hannah	Jane	Kelly
States Lived In	9	7	3	5	8



Sales	Jan	Feb	Mar	Apr	May
Month	500	3,000	1,000	5,000	3,500

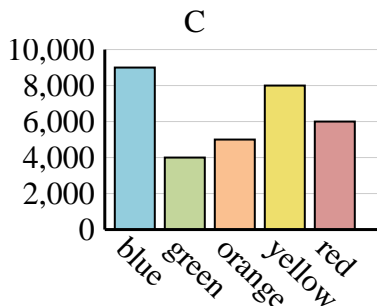
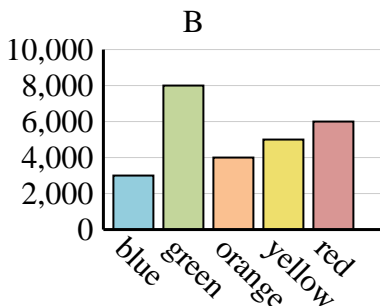
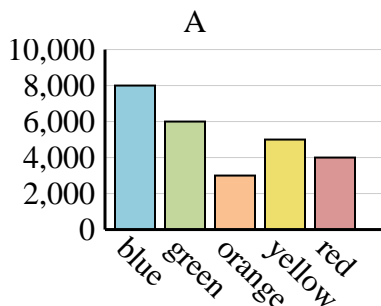




Determine which graph (A, B or C) best represents the information in the table.

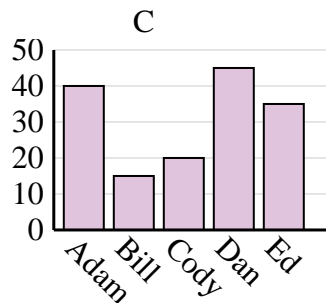
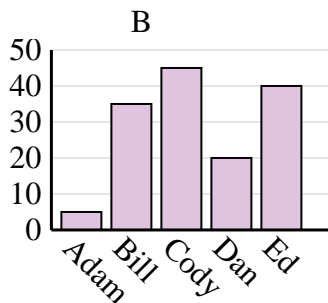
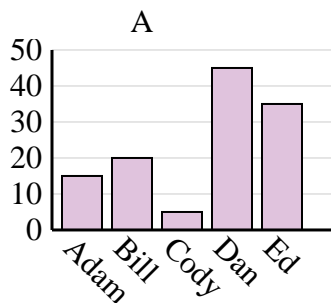
Answers

Favorite Color	blue	green	orange	yellow	red
People	9,000	4,000	5,000	8,000	6,000

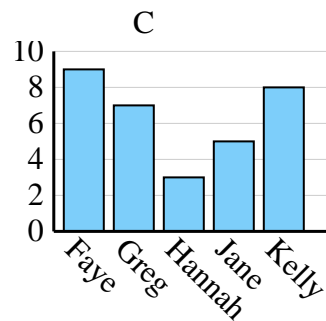
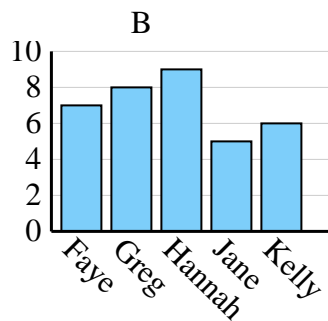
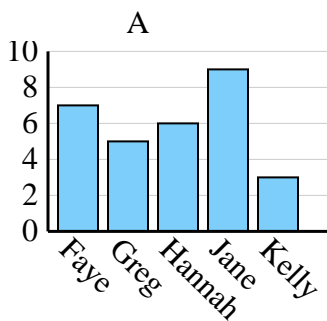


1. **C**
2. **B**
3. **C**
4. **C**

Name	Adam	Bill	Cody	Dan	Ed
Points	5	35	45	20	40



Name	Faye	Greg	Hannah	Jane	Kelly
States Lived In	9	7	3	5	8



Sales	Jan	Feb	Mar	Apr	May
Month	500	3,000	1,000	5,000	3,500

